

**ARMY PUBLIC SCHOOL RATNUCHAK**  
**MULTIPLE ASSESSMENT**  
**SESSION 2021-22**  
**CLASS IV**

**SUBJECT:-ENGLISH**

Q1. Read the following sentences and state their kind:

1. Will you wait here? \_\_\_\_\_
2. Please leave your footwear outside. \_\_\_\_\_
3. Oh! A policeman is at the door. \_\_\_\_\_
4. You must play out doors. \_\_\_\_\_

Q2. Write a synonym for each word.

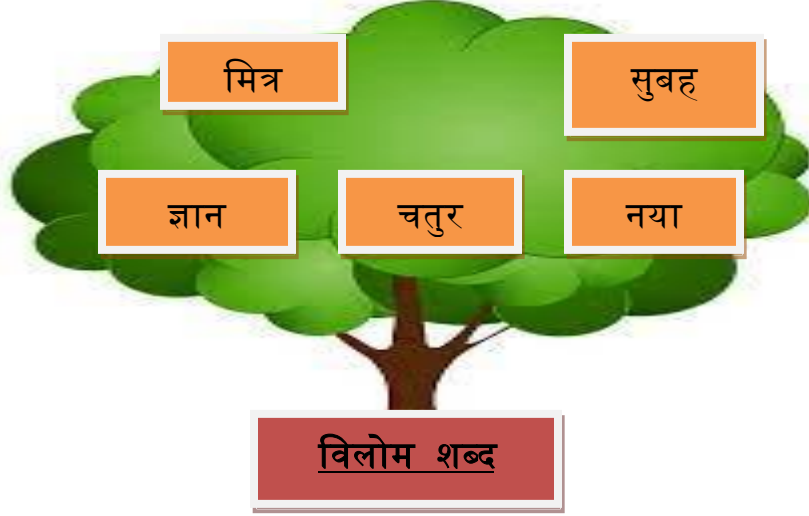
- 1.thin\_\_\_\_\_
- 2.silent\_\_\_\_\_
- 3.fall\_\_\_\_\_

Q3. Circle the compound noun in each sentence.

1. You look silly wearing sunglasses indoors.
2. She has beautiful dark eyelashes.
3. Boys are playing football.

## SUBJECT:-HINDI

प्र1. नीचे लिखे शब्दों के विलोम शब्द लिखो ।



1. \_\_\_\_\_
2. \_\_\_\_\_
3. \_\_\_\_\_
4. \_\_\_\_\_
5. \_\_\_\_\_

प्र2. नीचे लिखे मुहावरों को सही अर्थ लिखो ।

1. आँखें भर आना - \_\_\_\_\_
2. दंग रह जाना - \_\_\_\_\_
3. अंगूठा दिखाना - \_\_\_\_\_
4. गुणगान करना - \_\_\_\_\_
5. नाक में दम करना - \_\_\_\_\_

## SUBJECT:-MATHEMATICS

1. I am 4-digit number  
The digit at tens place is 3  
The digit at once place is double of the digit at tens place.  
The digit at hundreds place is 2 less than 8  
The digit at thousand place is the sum of the digit at ones and tens place.  
I am the number \_\_\_\_\_.
2. Number name of 56,009 \_\_\_\_\_.
3. How many tens make thousand? \_\_\_\_\_.
4. Write least 5-digit number that can be formed by using 6,7,2,0. \_\_\_\_\_.
5. The numbers that are added are called \_\_\_\_\_.
6. Rajeev has 4 boxes. He put 12 apples in each box. There are 3 apples left outside. How many apples are there in all? \_\_\_\_\_.
7. How much smaller is 63512 than 94291 \_\_\_\_\_.
8. The sum of two number is 94506. One of the number is 49605. Find the other number \_\_\_\_\_.
9.  $87412 + \underline{\hspace{2cm}} = 87412$ .
10. Add me to a number or subtract me from a number. The number remains the same. Who am I? \_\_\_\_\_.
11. Hindu Arabic numeral for XXXIV is \_\_\_\_\_.
12.  $XV + IV = \underline{\hspace{2cm}}$ .
13. Round off 5609 to the nearest thousand place . \_\_\_\_\_

**SUBJECT:-EVS**

A. Classify the following things into living things and non-living things.



Sun



Parrot



Mountain



Insect



Doll



River

LIVING  
THINGS

---

---

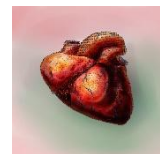
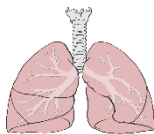
NON-LIVING  
THINGS

---

---

B. Solve the riddle with the help of the pictures given below:

1. I control thought and feelings What am I ? \_\_\_\_\_
2. I allow you to breathe. What am I ? \_\_\_\_\_
3. I am the size of fist. I pump blood. What am I ? \_\_\_\_\_
4. I am called the kitchen of the plant. I prepare food . What am I ? \_\_\_\_\_
5. I am beautiful. I am used for the decoration during weddings and festivals. What am I ? \_\_\_\_\_



C. Draw the structure of a leaf and label its parts.

**SUBJECT:-COMPUTER**



**Q1. Fill in the blanks with appropriate words.**

**Analytical Engine    Laptop    ECG machine    IBM    Minicomputer**

- a. \_\_\_\_\_ is developed by Charles Babbage.
- b. The PC-AT was introduced by\_\_\_\_\_.
- c. \_\_\_\_\_ is a Hybrid computer.
- d. A notebook computer is also called a\_\_\_\_\_
- e. \_\_\_\_\_computers are used in banks.

**Q2. Write “T” for true and “F” for false.**

- a. Abacus was the first calculating device.
- b. Tabulating machine was developed by Charles Babbage.
- c. IBM stands for International Business Machine.
- d. Voltmeter is an analog computer.
- e. Smartphone is an Internet-enabled phone.

**NOTE: - Multiple Assessment is compulsory.**

**Do in your class work notebook.**